

Please check the examination details below before entering your candidate information	
Candidate surname	Other names
Centre Number	Candidate Number
<div></div> <div></div> <div></div> <div></div> <div></div>	<div></div> <div></div> <div></div> <div></div> <div></div>
Pearson Edexcel International GCSE (9–1)	
Tuesday 11 June 2024	
Morning (Time: 1 hour 15 minutes)	Paper reference 4CH1/2CR
Chemistry UNIT: 4CH1 PAPER: 2CR	
You must have: Calculator, ruler	Total Marks

Instructions

- Use **black** ink or ball-point pen.
- **Fill in the boxes** at the top of this page with your name, centre number and candidate number.
- Answer **all** questions.
- Answer the questions in the spaces provided
– *there may be more space than you need.*
- Show all the steps in any calculations and state the units.

Information

- The total mark for this paper is 70.
- The marks for **each** question are shown in brackets
– *use this as a guide as to how much time to spend on each question.*

Advice

- Read each question carefully before you start to answer it.
- Write your answers neatly and in good English.
- Try to answer every question.
- Check your answers if you have time at the end.

Turn over ►

R73426A

©2024 Pearson Education Ltd.
F:1/1/1/1/1/1/

The Periodic Table of Elements

1	2											3	4	5	6	7	0	
																	4.0 He helium 2	

* The lanthanoids (atomic numbers 58 to 71) and the actinoids (atomic numbers 90 to 103) have been omitted.

The relative atomic masses of copper and chlorine have not been rounded to the nearest whole number.

DO NOT WRITE IN THIS AREA

DO NOT WRITE IN THIS AREA

DO NOT WRITE IN THIS AREA

BLANK PAGE

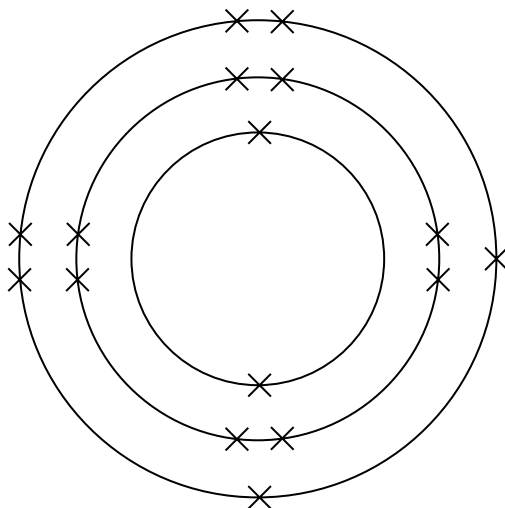


Answer ALL questions.

Some questions must be answered with a cross in a box ☐. If you change your mind about an answer, put a line through the box ☒ and then mark your new answer with a cross ☐.

1 This question is about sulfur.

(a) The diagram represents the electronic configuration of an atom of sulfur.



(i) Which period of the Periodic Table contains sulfur?

(1)

- A 2
- B 3
- C 4
- D 6

(ii) What is the charge on a sulfide ion?

(1)

- A 1+
- B 2+
- C 1-
- D 2-

DO NOT WRITE IN THIS AREA

DO NOT WRITE IN THIS AREA

DO NOT WRITE IN THIS AREA

(b) When a mixture of sulfur and zinc is heated to a high temperature a reaction occurs, forming the compound zinc sulfide, ZnS

- (i) Give a reason why the mixture of sulfur and zinc needs heating before a reaction occurs.

(1)

- (ii) Calculate the relative formula mass (M_r) of zinc sulfide.

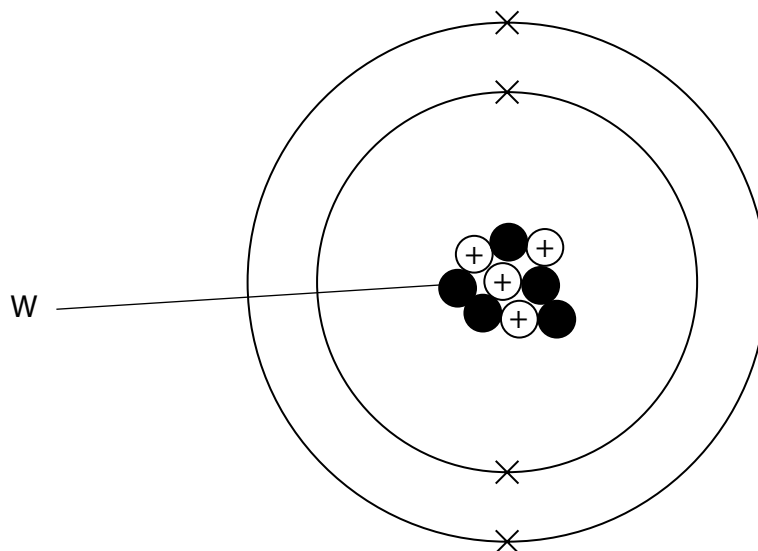
[for Zn, $A_r = 65$ for S, $A_r = 32$]

(1)

$M_r =$

(Total for Question 1 = 4 marks)

2 (a) The diagram represents an atom of an element.



(i) What is the name of the particle labelled W?

(1)

- A** electron
- B** ion
- C** neutron
- D** proton

(ii) What is the mass number of this atom?

(1)

- A** 4
- B** 5
- C** 9
- D** 13

(b) These are the symbols for the two isotopes of lithium.



- (i) In terms of sub-atomic particles, give one similarity and one difference between the two isotopes.

(2)

similarity

difference

- (ii) A sample of lithium contains 7.5% of ${}^6_3\text{Li}$ and 92.5% of ${}^7_3\text{Li}$

Calculate the relative atomic mass (A_r) of this sample of lithium.

(2)

$A_r =$

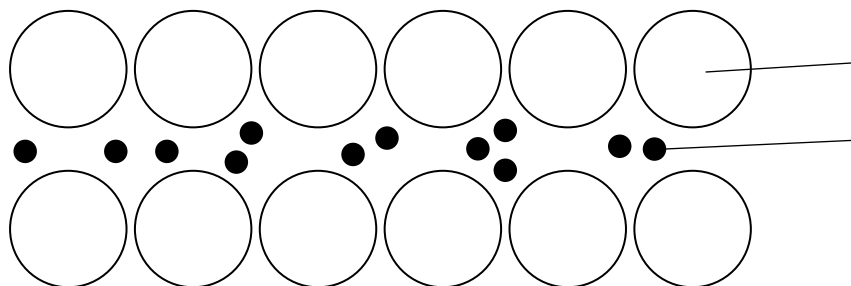
(Total for Question 2 = 6 marks)

3 This question is about magnesium metal and its compounds.

(a) (i) The diagram represents the structure of magnesium.

Complete the diagram by adding the labels.

(2)



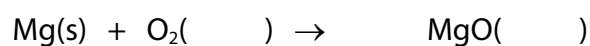
(ii) Explain why magnesium is malleable.

(2)

(b) Magnesium burns in oxygen gas to form solid magnesium oxide.

(i) Complete the chemical equation for the reaction by balancing the equation and adding the state symbols.

(2)



(ii) Give a reason why magnesium is oxidised in this reaction.

(1)

(c) A student uses this method to make a solution of magnesium chloride.


Step 1 measure 25 cm³ of dilute hydrochloric acid into a beaker

Step 2 add magnesium powder a little at a time

Step 3 keep adding magnesium powder until it is in excess

Step 4 remove the excess magnesium powder by filtration

This is the equation for the reaction.



(i) Give a reason why the student uses magnesium powder rather than magnesium ribbon.

(1)

(ii) Give a reason why the student adds an excess of magnesium in step 3.

(1)

(iii) Calculate the minimum mass of magnesium needed to react with 25.0 cm³ of 2.00 mol/dm³ hydrochloric acid.

[for Mg, $A_r = 24$]

(3)

mass = g

(Total for Question 3 = 12 marks)

4 This question is about the manufacture of ethanol by the fermentation of glucose.

(a) Fermentation needs to be done in the absence of air.

Give **two** other conditions needed for fermentation.

(2)

1

2

(b) Explain why fermentation needs to be done in the absence of air.

(2)

(c) (i) Complete the equation for fermentation.

(1)



(ii) A mixture containing 500 mol of glucose is fermented.

A mass of 5750 g of ethanol is obtained.

Calculate the percentage yield.

[for ethanol, $M_r = 46$]

(3)

percentage yield = %

(Total for Question 4 = 8 marks)

DO NOT WRITE IN THIS AREA

DO NOT WRITE IN THIS AREA

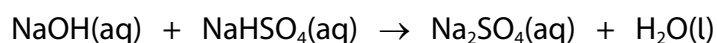
DO NOT WRITE IN THIS AREA

BLANK PAGE



- 5 Sodium sulfate can be prepared by the reaction between sodium hydroxide solution and sodium hydrogensulfate (NaHSO_4) solution.

This is the equation for the reaction.



Sodium hydrogensulfate solution is acidic.

A student adds 25.0 cm^3 of sodium hydroxide solution to a conical flask and adds two drops of indicator.

The student does a titration.

- (a) (i) Name a piece of apparatus that should be used to add 25.0 cm^3 of sodium hydroxide solution to the conical flask. (1)
- (ii) Describe the method the student should use to find the accurate volume of sodium hydrogensulfate solution needed to neutralise the 25.0 cm^3 of sodium hydroxide solution. (5)

- (b) The student repeats the titration without the indicator and forms a solution of sodium sulfate.

Describe how the student can obtain pure, dry crystals of hydrated sodium sulfate from the solution.

(4)

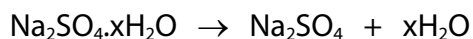
DO NOT WRITE IN THIS AREA

DO NOT WRITE IN THIS AREA

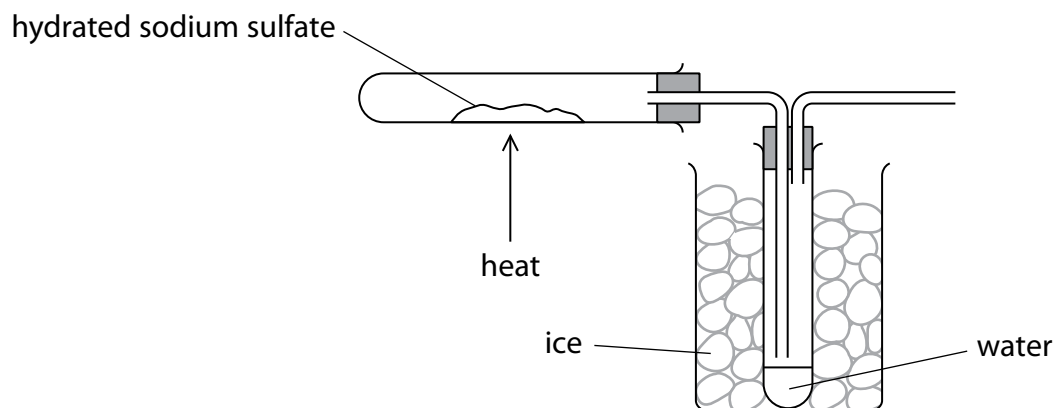
DO NOT WRITE IN THIS AREA

(c) Crystals of hydrated sodium sulfate decompose when heated.

This is the equation for the decomposition.



A student uses this apparatus to find the value of x .



The student heats the crystals until the decomposition is complete.

The table shows the student's results.

mass of empty test tube in g	25.12
mass of test tube and $\text{Na}_2\text{SO}_4 \cdot x\text{H}_2\text{O}$ in g	31.56
mass of test tube and Na_2SO_4 in g	27.96

Use the results to calculate the value of x .

[for Na_2SO_4 , $M_r = 142$ for H_2O , $M_r = 18$]

(4)

value of $x =$

(Total for Question 5 = 14 marks)

DO NOT WRITE IN THIS AREA

DO NOT WRITE IN THIS AREA

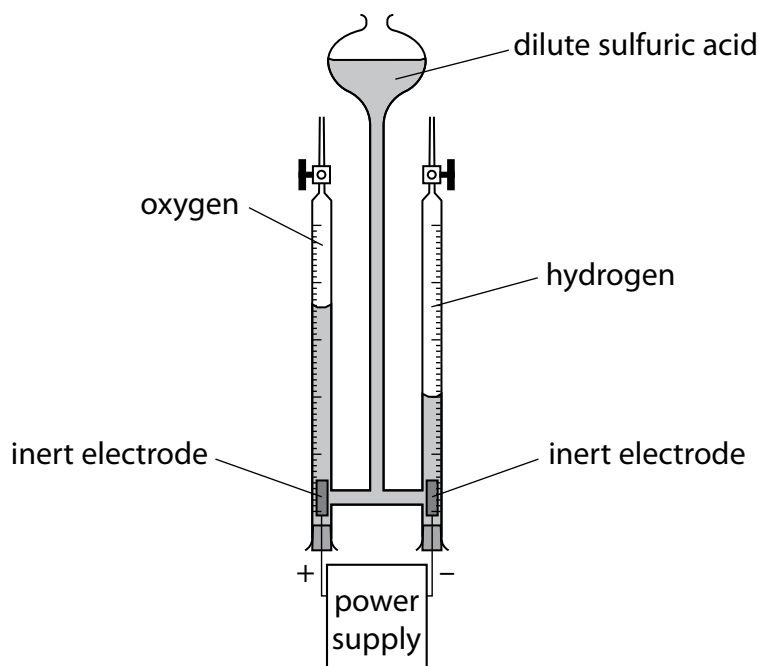
DO NOT WRITE IN THIS AREA

BLANK PAGE



6 This question is about electrolysis.

- (a) This apparatus is used to collect the gases produced when an electric current passes through dilute sulfuric acid.



- (i) Name a suitable material for the inert electrodes. (1)
- (ii) Give a test to show that the gas produced at the positive electrode is oxygen. (1)
- (iii) Give a test to show that the gas produced at the negative electrode is hydrogen. (1)

DO NOT WRITE IN THIS AREA

DO NOT WRITE IN THIS AREA

DO NOT WRITE IN THIS AREA

- (iv) Give an ionic half-equation for the formation of hydrogen at the negative electrode.

(1)

- (v) The oxygen gas in the tube has a volume of 17.8 cm^3 at rtp.

Calculate the mass, in grams, of oxygen gas in the tube.

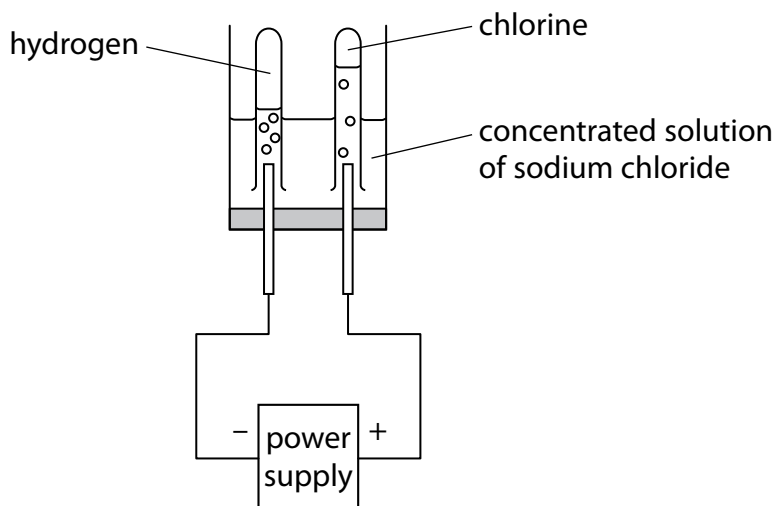
Give your answer to 3 significant figures.

[for O_2 at rtp, molar volume = $24\,000 \text{ cm}^3$]

(3)

mass of oxygen = g

(b) This apparatus is used to electrolyse a concentrated solution of sodium chloride.



(i) Give a reason why sodium chloride solution conducts electricity.

(1)

(ii) The positive ions in the solution are H^+ and Na^+ .

Give a reason why hydrogen forms at the negative electrode rather than sodium.

(1)

(iii) A sample of the solution is taken from near the negative electrode. The sample is tested with universal indicator.

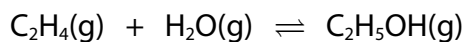
Explain the final colour of the universal indicator.

(2)

(Total for Question 6 = 11 marks)

7 Gaseous ethanol is manufactured by reacting ethene gas with steam.

This is the equation for the reaction.



- (a) (i) The pressure on an equilibrium mixture of the three gases is decreased. All the other conditions are kept the same.

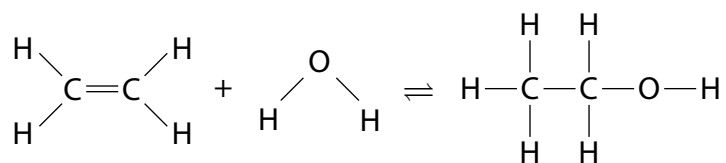
Predict the effect of this change on the yield of ethanol at equilibrium, giving a reason for your answer.

(2)

- (ii) Predict the effect of adding a catalyst on the yield of ethanol at equilibrium, giving a reason for your answer.

(2)

(b) The equation shows the displayed formulae for the reactants and products.



The table gives the bond energies.

Bond	Bond energy in kJ/mol
C—H	414
C=C	614
O—H	463
C—C	346
C—O	358

- (i) Using the data in the table and the equation, show that the enthalpy change, ΔH , is approximately -40 kJ/mol .

(3)

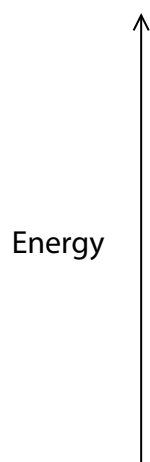
- (ii) Explain, in terms of bonds broken and bonds made, why this reaction is exothermic.

(2)

(iii) Draw an energy level diagram for the reaction between ethene and steam.

Label the enthalpy change, ΔH .

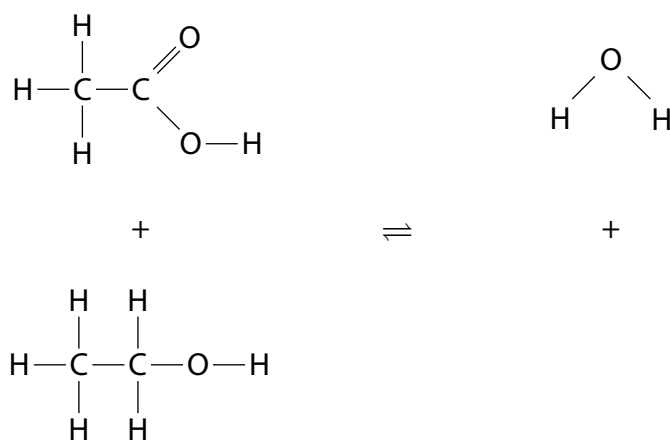
(3)



(c) Ethanoic acid reacts with ethanol to form ester A and water.

(i) Complete the equation by adding the displayed formula of ester A.

(2)



ester A

(ii) Give the name of ester A.

(1)

(Total for Question 7 = 15 marks)

TOTAL FOR PAPER = 70 MARKS

DO NOT WRITE IN THIS AREA

DO NOT WRITE IN THIS AREA

DO NOT WRITE IN THIS AREA

BLANK PAGE



DO NOT WRITE IN THIS AREA

DO NOT WRITE IN THIS AREA

DO NOT WRITE IN THIS AREA

BLANK PAGE



DO NOT WRITE IN THIS AREA

DO NOT WRITE IN THIS AREA

DO NOT WRITE IN THIS AREA

BLANK PAGE

